

Practice your facts. Complete.

18. $9 + \underline{\quad} = 15$

$\underline{\quad} + 5 = 14$

$\underline{\quad} + 7 = 14$

$4 + \underline{\quad} = 13$

$\underline{\quad} + 8 = 15$

19. $16 = 9 + \underline{\quad}$

$15 = \underline{\quad} + 6$

$15 = 9 + \underline{\quad}$

$16 = \underline{\quad} + 7$

$14 = 8 + \underline{\quad}$

20. $16 = \underline{\quad} + 8$

$\underline{\quad} + 7 = 15$

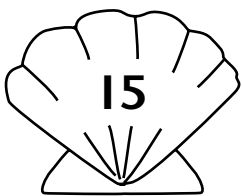
$\underline{\quad} + 8 = 16$

$6 + \underline{\quad} = 15$

$9 + \underline{\quad} = 14$

Complete the names for the number.

21.




$8 + \square$

$6 + \square$

$7 + \square$

$9 + \square$

22.



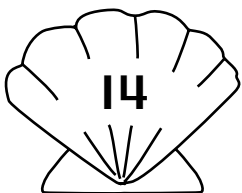
$9 + \square$

$7 + \square$

$8 + \square$

$10 + \square$

23.



$6 + \square$

$7 + \square$

$9 + \square$

$8 + \square$

Use $>$, $<$, or $=$.

24. $13 \bigcirc 9 + 7$

$12 \bigcirc 6 + 5$

25. $16 \bigcirc 7 + 8$

$10 \bigcirc 4 + 5$

26. $8 \bigcirc 12 - 4$

$15 \bigcirc 8 + 4$