

Section 2 Assessment



Vocabulary

Choose the vocabulary word best described by each definition.
Write the word in the space provided.

circuit

resistance

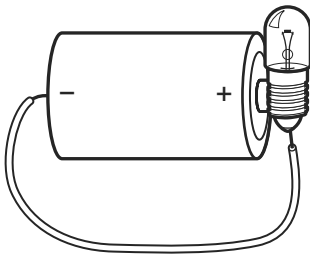
current

_____ ① opposition to the flow of current

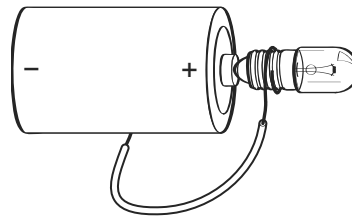
_____ ② flow of electric charges

Which Bulbs Will Light?

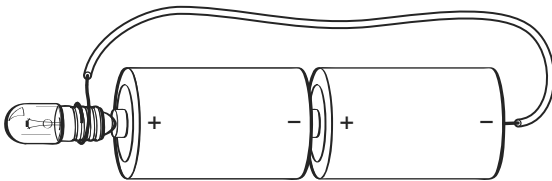
Write **open** or **closed** for each circuit. For each open circuit, fix the picture by drawing a wire to show how to light the bulb.



③ _____



④ _____



⑤ _____

Building a Circuit

- ⑥ Use the materials provided to build a circuit that lights the bulb. Draw your circuit on the back of this sheet.