

# Section 6 Assessment



## Vocabulary

- ❶ What is a compass used for?

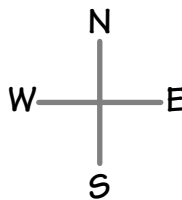
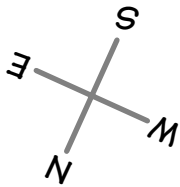

---



---

## Using a Compass

- ❷ A student makes the two drawings shown on a sidewalk. Which drawing is accurate based on the compass shown? Circle your answer.



## Identify the North Pole of a Magnet

Locate the "N" your teacher has taped to the wall. It shows you which direction north is. Hold the string so that the ring magnet can turn freely. Wait until the magnet stops turning.

- ❸ What color is the sticker that marks the magnet's north pole? \_\_\_\_\_