

# Section 9 Assessment

## Vocabulary

1 What is a magnet?

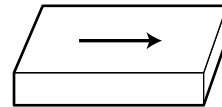
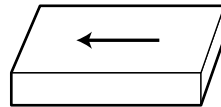
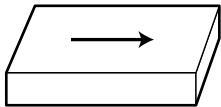
---



---

## Attract or Repel?

Each picture below shows two magnets side by side. Arrows show the magnetic force between them. Label each picture **repel** or **attract**.



2 \_\_\_\_\_

3 \_\_\_\_\_

## Magnets

4 Hold the two magnets at your station so that they repel each other. Draw the magnets below and show where the dots are on each magnet.