

Section 7 Assessment,



Page 1

Vocabulary

- 1 Which of these objects could someday turn into a **fossil**? Circle your answers.


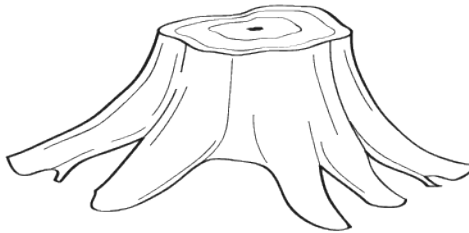


tree stump

glass bottle

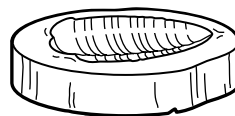
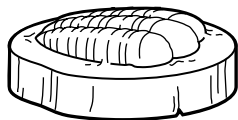
cat

flower

bike



- 2 Which is the **mold fossil**? Which is the **cast fossil**? Label each picture.



Section 7 Assessment,



Page 2

Fossil Layers

- 3** Put the three fossils in the boxes at right. Place them in order from youngest to oldest. The youngest goes at the top.
- 4** Draw each fossil in the correct box. Then write each fossil name in the correct box.

Youngest**Middle****Oldest**