

Section 7 Assessment, Page 1



Vocabulary

① Which measures wind speed? Circle the answer.


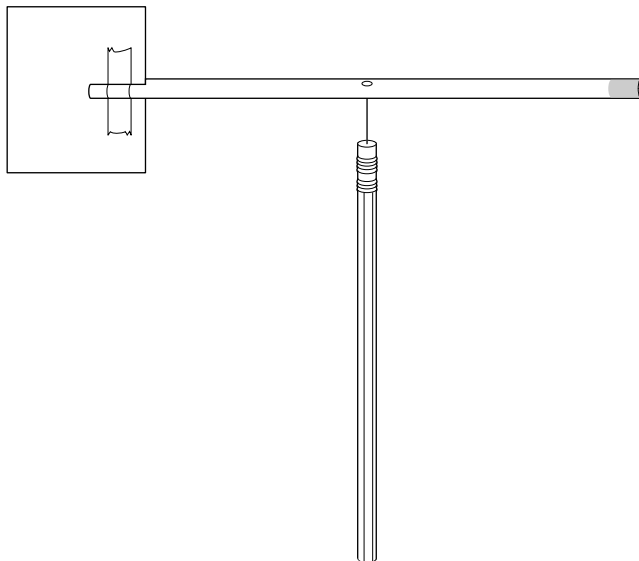
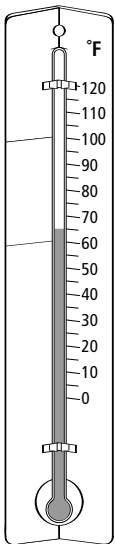
wind vane

anemometer

thermometer

Weather Tools

② Which measures wind direction? Circle the answer.



Section 7 **Assessment**, Page 2



Wind Direction and Speed

- 3** How fast is the wind from the fan?
Use the anemometer.

_____ turns in one minute

- 4** What direction is the wind? Use the wind vane. Use a part of the room to tell the direction, for example, "from the teacher's desk" or "from the blackboard."
