


**GPS** Test Practice

Choose the correct answer.



1. What does this tool measure?

rain  
(A)

wind  
(B)

temperature  
(C)

S1E1b

2. When water freezes it is a \_\_\_\_\_

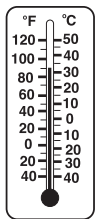
liquid.  
(A)

solid.  
(B)

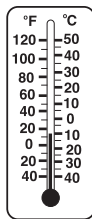
gas.  
(C)

S1E2a


3. Which thermometer shows the temperature in a cold season?



(A)



(B)



(C)

S1E1c

4. Which is a kind of weather?

rainy  
(A)

the Sun  
(B)

temperature  
(C)

S1E1a