



Name _____ Date _____

Hundredths

CA Standards
NS 3.4, NS 3.0

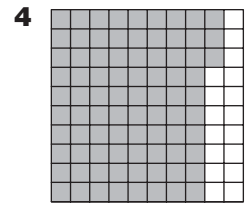
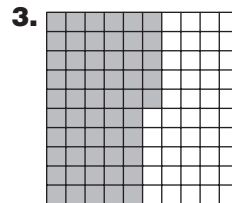
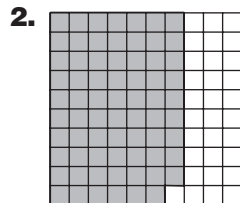
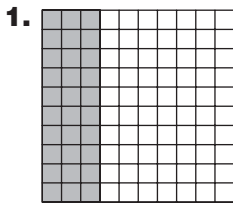
You can write a fraction and a decimal for the shaded part on a model.

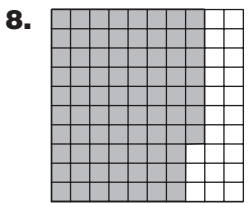
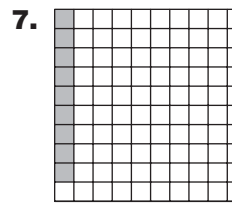
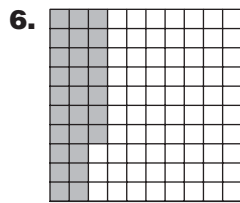

Jane made a tower with blocks. She had 100 blocks. She used 62 blocks to build the tower. What part of the blocks did she use?

She used $\frac{62}{100}$ or 0.62 of the blocks.

Model	Fraction	Decimal		
	$\frac{62}{100}$ parts shaded parts in all	ones	tenths	hundredths
		0	• 6	2
		Write: 0.62		
		Read: sixty-two hundredths		

Write a fraction and a decimal for the shaded part.







Writing Math How would you show 0.43 on a model that was divided into 100 equal parts?