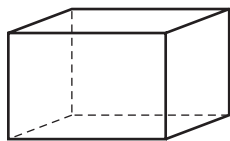


Name _____ Date _____

Solid Figures

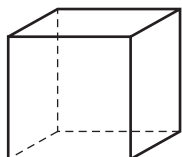
CA Standard
MG 2.5

Solid figures are 3-dimensional. There are different kinds of solid figures with different names. Solid figures can be sketched on paper.



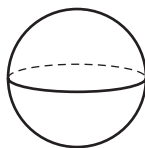
Rectangular Prism

Each face is a rectangle.



Cube

Each face is a square.



Sphere

There are no flat surfaces.



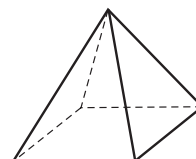
Cone

The bottom is a circle, and the top is a point.



Cylinder

The bottom and top are circles.



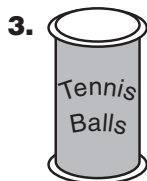
Square Pyramid

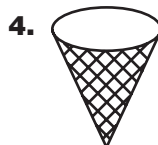
The bottom is a square, and the sides are triangles.

Name the solid figure that the object looks like.











Writing Math Which solid figures do not roll? Explain.

