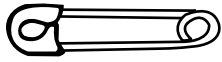


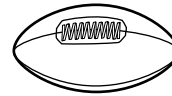


# Convert Customary Units of Length

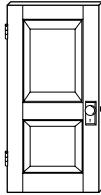
CA Standards  
MG 1.4, MG 1.1




A safety pin is about 1 inch long.



A football is about 1 foot long.



A door is about 1 yard wide.



You can walk about 1 mile in 20 minutes.

Choose the unit you would use to measure each.

Write *inch*, *foot*, *yard*, or *mile*.

1. the length of a river

\_\_\_\_\_

2. the width of a CD

\_\_\_\_\_

3. the length of your classroom

\_\_\_\_\_

4. the height of a flag pole

\_\_\_\_\_

Circle the letter of the better estimate.

5. the length of a hiking trail

a. 3 miles

b. 3 yards

6. the width of a kitchen

a. 4 yards

b. 4 inches

7. the length of a pen

a. 6 feet

b. 6 inches

8. the height of a teacher

a. 5 feet

b. 5 yards



**Writing Math** A piece of red ribbon is 2 feet long. A piece of blue ribbon is more than a yard long. Which piece is longer? Explain.

\_\_\_\_\_

\_\_\_\_\_

\_\_\_\_\_