



Name _____ Date _____

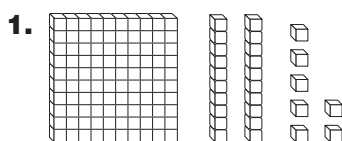
Hands On: Model Numbers

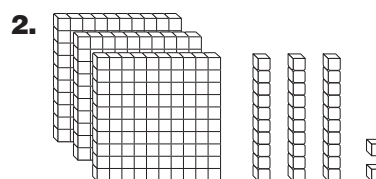
CA Standard
KEY NS 1.3

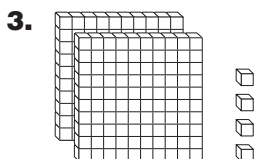
You can use a place value chart to find the value of each digit in 345. Then you can model the number with base-ten blocks.

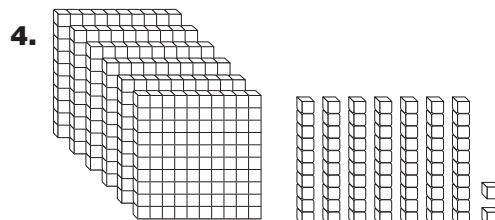
hundreds	tens	ones	
3	4	5	
The value of the 3 is 300.	The value of the 4 is 40.	The value of the 5 is 5.	

Write each number.











Writing Math Does the place of the digits in a number tell you how to model the number with base-ten blocks? Explain.
