

Compare Nonstandard Units

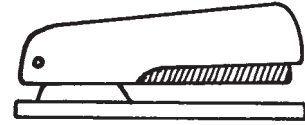
CA Standards
MG 1.2, MG 1.1

You can use different units to measure the same object.




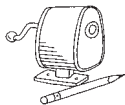





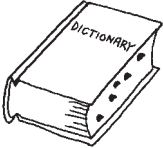


Measure the stapler with  and .

The stapler is about 4  long.

The stapler is about 6  long.



Find the real object. Use  and  to measure.

	Object	Measurement
1.		about _____  about _____ 
2.		about _____  about _____ 
3.		about _____  about _____ 
4.		about _____  about _____ 



Writing and Reasoning Explain why the same object has a different measurement in connecting cubes than in paper clips.
