

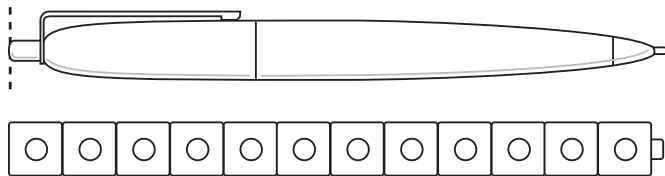
Hands On: Nonstandard Units

CA Standards
MG 1.1, MR 1.2

You can use units such as ones blocks to estimate and measure length.

Estimate: The pen looks about **12** ones blocks long.




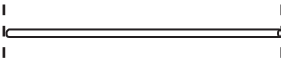


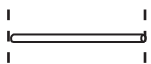


Measure: about 2 ones blocks long



Estimate the length of each.

Use  to measure.

Remember
Line up the units with the left end of the string.

	Object	Estimate	Measurement
1.		about _____ 	about _____ 
2.		about _____ 	about _____ 
3.		about _____ 	about _____ 



Writing and Reasoning Explain how to find which string is the longest.
