


More About Fractions

CA Standards
KEY NS 4.1, NS 4.0

Fractions can name more than one equal part of a whole. What part is shaded?

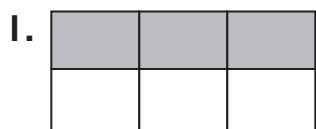


2 of 3 equal parts are shaded.

$\frac{2}{3}$ are shaded.

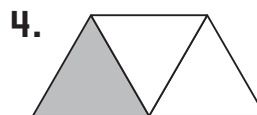
Two thirds are shaded.

Write the fraction for the shaded parts.



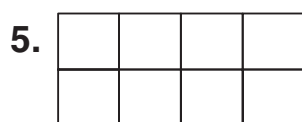







Color to show the number of shaded parts.

Write the fraction for the shaded part.



3 parts shaded



6 parts shaded



Writing and Reasoning A square is divided into 8 equal parts. 5 of the parts are shaded. Which fraction names the unshaded parts?
