



Name _____ Date _____

Unit Fractions

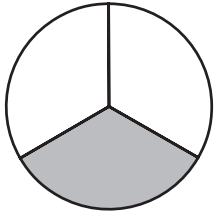
CA Standards

KEY NS 4.1, KEY NS 4.2

Fractions name equal parts of a whole.

A unit fraction names one of the equal parts.

What part is shaded?

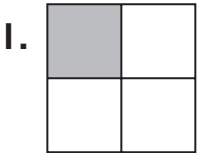


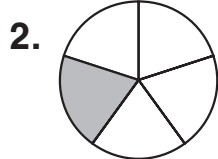
1 of 3 equal parts is shaded.

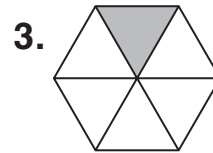
$\frac{1}{3}$ is shaded.

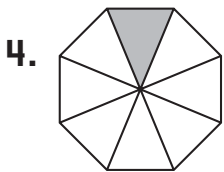
One third is shaded.

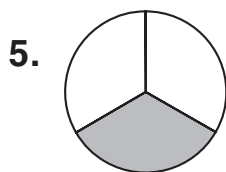
Write the fraction for the shaded part.













Writing and Reasoning A circle is divided into 6 equal parts. One part is shaded. Explain how to write the fraction shown.
