



# Halves and Fourths

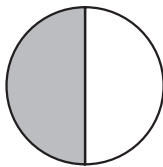
**CA Standards**  
**KEY** NS 4.1, **KEY** NS 4.2

Fractions divide a whole into parts.

1 of 2 equal parts is shaded.

$\frac{1}{2}$  is shaded.

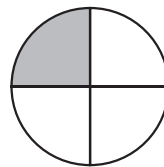
One half is shaded.



1 of 4 equal parts is shaded.

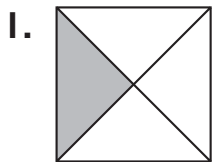
$\frac{1}{4}$  is shaded.

One fourth is shaded.



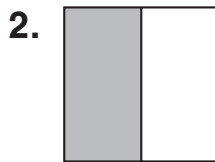
To Write a fraction:  $\frac{\square}{\square}$  Shaded part  
equal parts

**Write the fraction for the shaded part.**




Equal parts: \_\_\_\_\_

Fraction : \_\_\_\_\_



Equal parts: \_\_\_\_\_

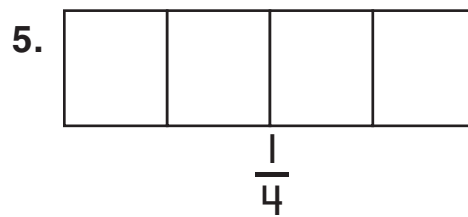
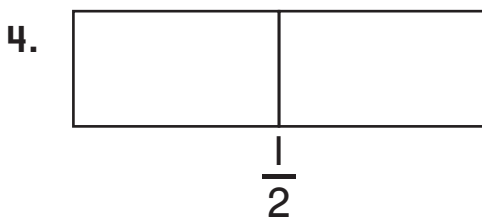
Fraction : \_\_\_\_\_



Equal parts: \_\_\_\_\_

Fraction : \_\_\_\_\_

**Fill in the fraction strip to show the fraction.**



**Writing and Reasoning** Explain what each number means in the fraction  $\frac{1}{4}$ .

\_\_\_\_\_

\_\_\_\_\_