






Geometric Patterns

CA Standard
KEY SDAP 2.0, SDAP 2.1

You can describe the shapes in a pattern to tell what is likely to come next.

 <p style="margin-top: 20px;">Solution: </p>	<p>What do you know about the pattern? Shapes used: circle, triangle, square Pattern repeats</p> <p>Pattern unit: <u></u></p>
--	--

Draw the next shape in the pattern.

1. Liam makes a pattern with his shapes. What is likely to be the next shape in Liam's pattern?



2. Mark is making a border for his treasure box. What is likely to come next?



Writing and Reasoning What is a pattern unit?

How can it help you to extend a pattern? Explain.
