

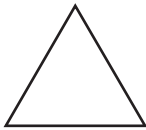
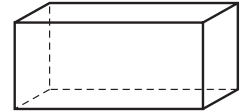
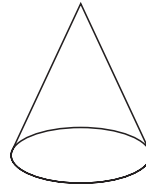
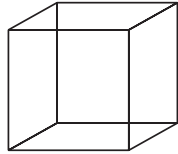
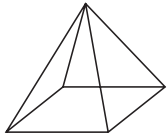




Identify Faces

CA Standard
KEY NS 0.0


You can trace the face of a solid shape to make a plane figure.



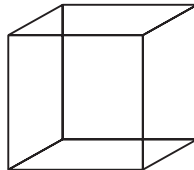
Draw the plane shapes you would make if you traced the faces of the solid shape.

Write the name of the plane shape.

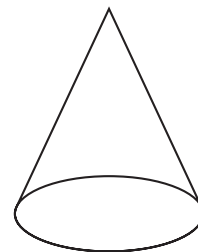
1.



2.



3.





Writing and Reasoning Name a solid figure that has different shaped faces. What shapes are the faces?
