



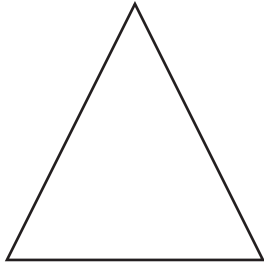
Name _____ Date _____

Combine and Separate Shapes

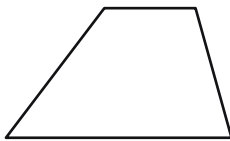
CA Standards
KEY MG 2.2, MR 1.2

You can cut shapes apart to make other shapes.
Use pattern blocks.

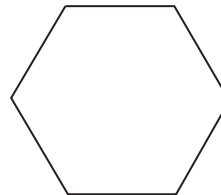
1. Use blocks to make this shape.
Draw the blocks.



3. How many triangle pattern blocks make up this shape?



4. How many triangle pattern blocks make up this shape?





Writing and Reasoning How can you know the answer to problem 4 without counting or dividing the shape into triangles?
