




Name \_\_\_\_\_ Date \_\_\_\_\_


# Compare Plane Shapes

CA Standard  
KEY MG 2.1

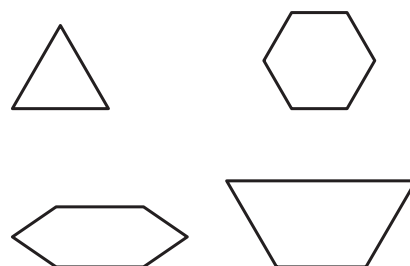
1. Circle the squares.



2. Circle the circles.



3. Circle the hexagons.



Write the name of the shape. Write two reasons for your answer.

4.



---

---

---

5.



---

---

---



**Writing and Reasoning** If you change the length of the sides of a square, what shape does it become? Explain.

---

---

---