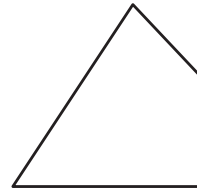





Plane Shapes

CA Standard
KEY MG 2.1

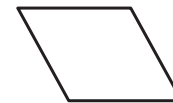
A shape with 4 sides is a **quadrilateral**.



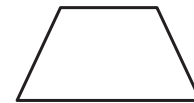
A **parallelogram** has opposite sides that are the same distance apart.




A **rhombus** is a parallelogram with 4 sides that are the same length.




A **trapezoid** has only one pair of opposite sides that are the same distance apart.



1. Draw a circle around every quadrilateral.



2. Draw a circle around every parallelogram.



Writing and Reasoning Does it matter if I sort using sides or vertices? Explain your answer.
