




Name \_\_\_\_\_ Date \_\_\_\_\_

# Sort Shapes


CA Standard  
KEY MG 2.1

Shapes come with sides and vertices. You can sort shapes by how many sides or vertices you have. The number of vertices always matches the number of sides.

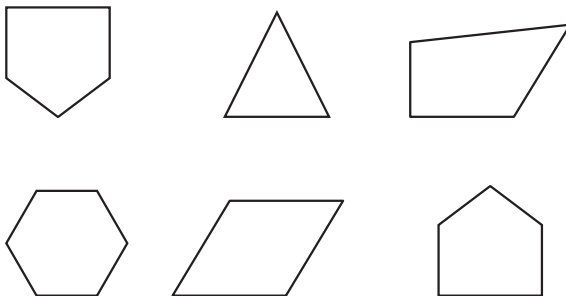
1. Circle the shapes with 3 sides.



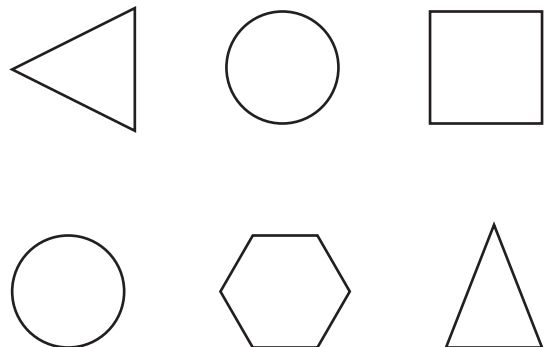
2. Circle the shapes with 4 vertices.



3. Circle the shapes with 5 sides.



4. Circle the shapes with 6 vertices.



**Writing and Reasoning** How many sides does a circle have? Explain your answer.

---

---

---