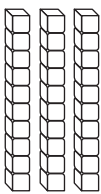



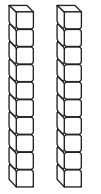
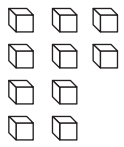


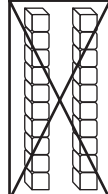
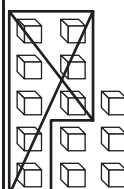










Practice Regrouping with 10 to 14

CA Standards
KEY NS 2.2, NS 2.0

Ms. Martin has 33 stamps. She needs to mail 28 letters. How many stamps will she have left?

<p>Step 1 Show 33. Can you subtract 8 ones?</p> <div style="border: 1px solid black; padding: 5px; margin: 10px 0;"> <table style="width: 100%; border-collapse: collapse;"> <thead> <tr> <th style="width: 50%; text-align: center;">Tens</th> <th style="width: 50%; text-align: center;">Ones</th> </tr> </thead> <tbody> <tr> <td style="text-align: center;">  </td> <td style="text-align: center;">  </td> </tr> </tbody> </table> </div>	Tens	Ones			<p>Step 2 Regroup 1 ten as 10 ones.</p> <div style="border: 1px solid black; padding: 5px; margin: 10px 0;"> <table style="width: 100%; border-collapse: collapse;"> <thead> <tr> <th style="width: 50%; text-align: center;">Tens</th> <th style="width: 50%; text-align: center;">Ones</th> </tr> </thead> <tbody> <tr> <td style="text-align: center;">  </td> <td style="text-align: center;">  </td> </tr> </tbody> </table> </div>	Tens	Ones			<p>Step 3 Subtract 28.</p> <div style="border: 1px solid black; padding: 5px; margin: 10px 0;"> <table style="width: 100%; border-collapse: collapse;"> <thead> <tr> <th style="width: 50%; text-align: center;">Tens</th> <th style="width: 50%; text-align: center;">Ones</th> </tr> </thead> <tbody> <tr> <td style="text-align: center;">  </td> <td style="text-align: center;">  </td> </tr> </tbody> </table> </div>	Tens	Ones			<p>Step 4 How much is left?</p> <p>5 ones</p> $33 - 28 = 5$
Tens	Ones														
															
Tens	Ones														
															
Tens	Ones														
															

Subtract. Regroup if you need to.

1. $42 - 28$

2. $61 - 29$

3. $74 - 46$

Tens	Ones
□	□
-	

Tens	Ones
□	□
-	

Tens	Ones
□	□
-	



Writing and Reasoning What is the biggest number I can get in the ones column when I subtract with regrouping? Explain.
