



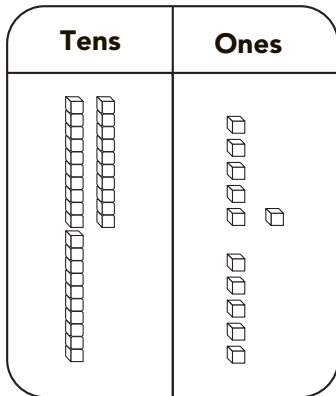
Name _____ Date _____

Practice Regrouping 15 to 18

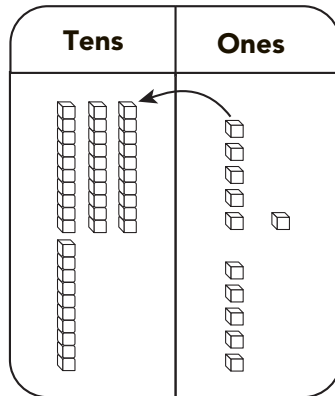
CA Standard
KEY NS 2.2

Add 26 and 15.

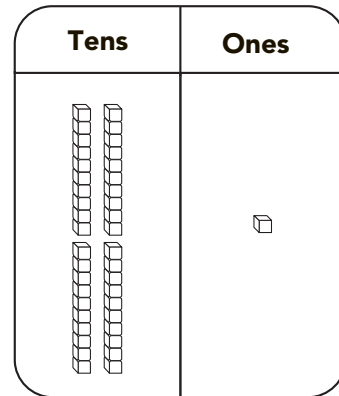
Step 1 Show 26 and 15. Add 6 ones and 5 ones.



Step 2 Regroup 10 ones as 1 ten.



Step 3 Add the tens.



Use Workmat 3 with and .

1.

	Tens	Ones
	<input type="text"/>	<input type="text"/>
	1	8
+	3	4
	<input type="text"/>	<input type="text"/>

Think
8 and 4 is 12. How many tens can I make from 12 ones?

2.

	Tens	Ones
	<input type="text"/>	<input type="text"/>
	4	5
+	2	5
	<input type="text"/>	<input type="text"/>

3.

	Tens	Ones
	<input type="text"/>	<input type="text"/>
	6	4
+	2	3
	<input type="text"/>	<input type="text"/>



Writing and Reasoning If one addend has a zero in the ones place, do you need to regroup to find the sum? Explain.
