

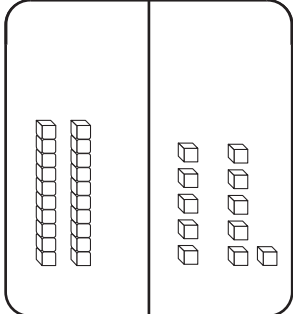
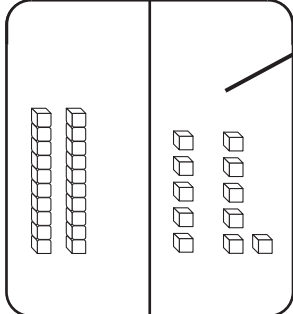
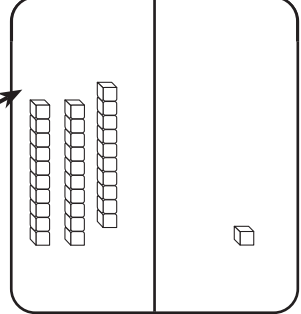


Name \_\_\_\_\_ Date \_\_\_\_\_

# Practice Regrouping 10 to 14

CA Standard  
KEY NS 2.2

Add  $25 + 6$ .

<p><b>Step 1</b></p> <p>Show 2 tens and 5 ones. Show 6 more ones.</p> <div style="text-align: center;">  </div>	<p><b>Step 2</b></p> <p>Add the ones. Regroup 10 ones as 1 ten.</p> <div style="text-align: center;">  </div>	<p><b>Step 3</b></p> <p>Write the sum.</p> <div style="text-align: center;">  <p>3 tens      1 one</p> <p style="font-size: 2em;">31</p> </div>
------------------------------------------------------------------------------------------------------------------------------------------------------------------------------------------------------	----------------------------------------------------------------------------------------------------------------------------------------------------------------------------------------------------	-----------------------------------------------------------------------------------------------------------------------------------------------------------------------------------------------------------------------------------

Use Workmat 3 with  and .

Show both numbers.	Add the ones. How many tens and ones are there?	Do you need to regroup?	What is the sum?
1. $16 + 18$	_____ tens _____ ones	Yes No	
2. $32 + 4$	_____ tens _____ ones	Yes No	
3. $55 + 7$	_____ tens _____ ones	Yes No	



**Writing and Reasoning** Is there a way of grouping the ones that makes regrouping easier?

---



---



---