




Name \_\_\_\_\_ Date \_\_\_\_\_

# Make Change



CA Standards  
KEY NS 5.1, NS 5.0

You can make change.

<p><b>Meish pays:</b></p>  <p style="text-align: center; margin-top: 10px;"><u>65¢</u></p>	<p><b>Meish buys:</b></p>  <p style="text-align: center; margin-top: 10px;"><u>62¢</u></p>	<p><b>Count on from the price to what is paid:</b></p>  <p style="text-align: center; margin-top: 10px;"> <u>63¢</u>    <u>64¢</u>    <u>65¢</u> </p>
<p><b>Solution:</b> The change is <u>3¢</u>.</p>		

Write the amount paid. Draw coins and count on to find the change.

1.

 <p style="text-align: center; margin-top: 10px;">_____ ¢</p>	 <p style="text-align: center; margin-top: 10px;">_____ ¢</p>	<p style="text-align: center; margin-top: 10px;">_____ ¢</p>
--	--	--



**Writing and Reasoning** Sander has \$1.00. Will he get less change if he buys a drink for 29¢ or a drink for 33¢? Explain.

---



---