



# Make a List

**CA Standards**  
**KEY** NS 5.1, SDAP 1.1

**Making a list can help you solve a problem.**

Karen wants to buy a bunch of flowers that cost  $25\text{¢}$ . She has quarters and nickels. She can make a list to find the ways she can make  $25\text{¢}$ .




	
1	
	5

She can make  $25\text{¢}$  2 ways.

**Use the coins to solve.**

**Complete the list.**

1. Seth wants to buy a toy truck for  $28\text{¢}$ . He has quarters, dimes, and pennies. How many ways can Seth make  $28\text{¢}$ ?

		
1.		
2.		
3.		
4.		

Seth can make  $28\text{¢}$  \_\_\_\_\_ ways.



**Writing and Reasoning** Explain which coin can be used to make any amount of money.