



Relate Addition and Subtraction

1




$$\underline{\quad} + \underline{\quad} = \underline{\quad}$$




$$\underline{\quad} - \underline{\quad} = \underline{\quad}$$

2




$$\underline{\quad} + \underline{\quad} = \underline{\quad}$$




$$\underline{\quad} - \underline{\quad} = \underline{\quad}$$

3



$$\underline{\quad} + \underline{\quad} = \underline{\quad}$$



$$\underline{\quad} - \underline{\quad} = \underline{\quad}$$

Directions: 1–3 Write the addition sentence. Circle and cross out the ones leaving. Write the related subtraction sentence.