


Estimate and Measure Length

1



Estimate

Measure

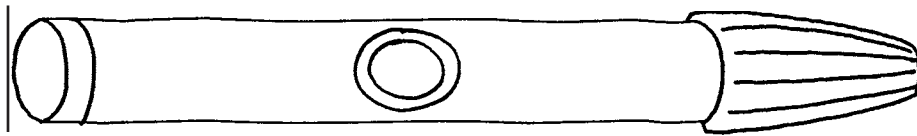
about _____



about _____



2



Estimate

Measure


about _____



about _____



3



Estimate

Measure

about _____



about _____



Directions: 1–3 Estimate how many cubes long. Measure. Record the length. Compare the measurement to the estimate.