





Add 10

Solve the problems. Use Workmat 1 with  if you wish.

Beth bought 10 balls of wool yesterday. Today she bought 2 more. How many balls of wool did she buy altogether?

She bought _____ balls of wool.

Draw or write to explain.

Yesterday	Today	Altogether
		

1. There are 10 snails in the garden. Mary finds 10 more snails in the backyard. How many snails are there in all?

_____ snails

2. Penny sees 10 dolls in the window. Sam adds more dolls. Now there are 14 dolls in the window. How many dolls did Sam add?

_____ dolls