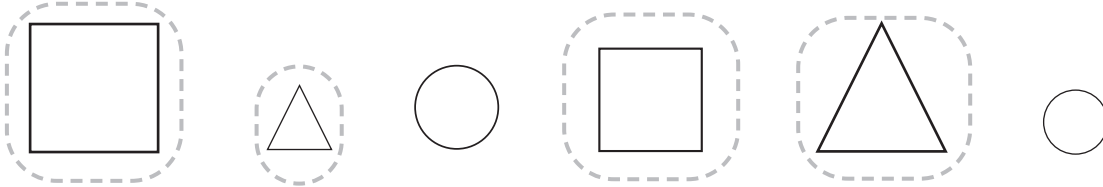


# Classifying and Sorting Shapes

Read the sorting rule.

Circle the shapes that follow each rule.

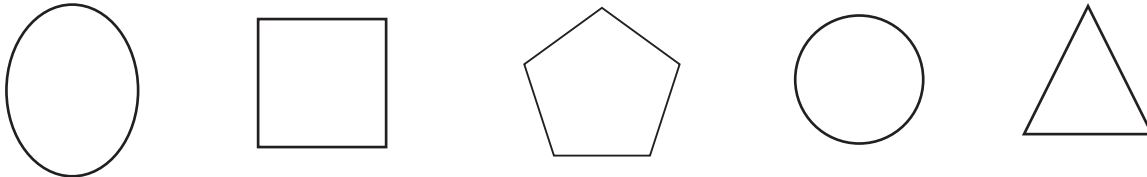
1. Shapes with corners



2. Shapes with 3 corners




3. Shapes with more than 3 sides



## Test Prep

Fill in the ○ for the correct answer. NH means Not Here.

4. Adam made a group of these shapes.



What was his sorting rule?

Large shapes

Small shapes

Square shapes

NH