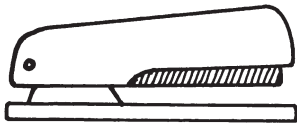


# Compare and Order Length

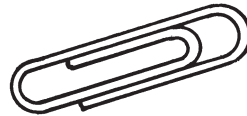
Is the object longer or shorter than your hand?

1.



longer     shorter

2.




longer     shorter

3.



longer     shorter

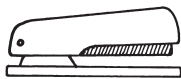
4.



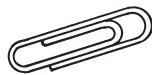
longer     shorter

Number the objects in order from shortest to longest.

5.



\_\_\_\_\_



\_\_\_\_\_



\_\_\_\_\_



\_\_\_\_\_

## Test Prep

Fill in the  for the correct answer. NH means Not Here.

6. Which of these items is probably longer than your shoe?

- pen      backpack      bar of soap      NH
-