

Name _____ Date _____

Description of Investigation and Student Report
Be an Investigator

The chief of the fire department has a circle graph that shows the exercise program for each of her firefighters. The graphs have gotten all mixed up. She would like you to match the description of the fire fighter's exercise program with the correct circle graph.

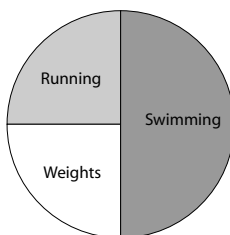
Information

Firefighter Exercise Programs — 12 hours per week

Firefighter Linda

Swimming: 3 hours
 Running: 3 hours
 Weights: 6 hours

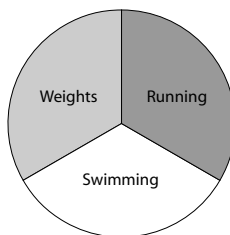
Circle Graph A:



Firefighter Tanya

Swimming: 3 hours
 Running: 6 hours
 Weights: 3 hours

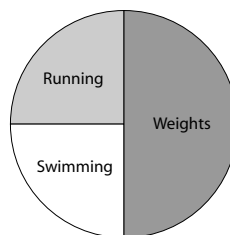
Circle Graph B:



Firefighter Jaime

Swimming: 4 hours
 Running: 4 hours
 Weights: 4 hours

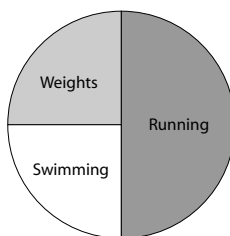
Circle Graph C:



Firefighter Joe

Swimming: 6 hours
 Running: 3 hours
 Weights: 3 hours

Circle Graph D:



Copyright © Houghton Mifflin Company. All rights reserved.

Name _____ Date _____

Description of Investigation and Student Report
Be an Investigator

This list shows which graph goes with each firefighter.

Firefighter Linda: _____

Firefighter Tanya: _____

Firefighter Jaime: _____

Firefighter Joe: _____

This is how I figured out which graph went with which firefighter:

