




Name \_\_\_\_\_ Date \_\_\_\_\_

**Description of Investigation and Student Report**  
**Be an Investigator**

The owner of a grocery store uses pictographs to keep track of how many hours his employees work. Unfortunately, he has lost the key to each pictograph and does not know what each symbol stands for. He would like you to figure out what the symbol in each pictograph stands for. He would also like to know how you figured it out so that if this ever happens again he will know what to do.




**Information**

Hours Worked	
John	
Linda	
Mio	

The storeowner knows that Mio worked 12 hours.

Name \_\_\_\_\_ Date \_\_\_\_\_

**Be an Investigator**  
**Student Report**

Days Worked	
Miguel	
Rob	
Tina	

The storeowner knows the total number of days worked is 28.

The clock symbol in the Hours Worked pictograph stands for \_\_\_\_\_.

This is how I figured it out: \_\_\_\_\_  
 \_\_\_\_\_  
 \_\_\_\_\_

The sun symbol in the Days Worked pictograph stands for \_\_\_\_\_.

This is how I figured it out: \_\_\_\_\_  
 \_\_\_\_\_  
 \_\_\_\_\_