

**Challenge****More or Fewer**

Draw the shapes to show **more**. Write the totals.

1.

1 more than **2** is .

2.

1 more than **4** is .

Cross out the shapes to show **fewer**. Write how many are not crossed out.

3.

1 fewer than **9** is .

4.

1 fewer than **6** is .

5.

**2** fewer than **5** is .

6.

**2** fewer than **8** is .

# Challenge

## More or Fewer

Draw the shapes to show **more**. Write the totals.




1 more than 2 is 3.

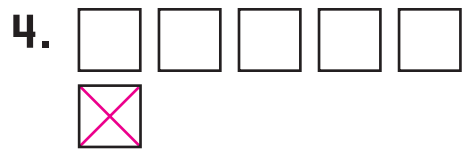


1 more than 4 is 5.

Cross out the shapes to show **fewer**. Write how many are not crossed out.




1 fewer than 9 is 8.



1 fewer than 6 is 5.



2 fewer than 5 is 3.



2 fewer than 8 is 6.