


**Challenge****More Fruit, Please!**

Draw more pieces of fruit to equal each total. Write the partners.

---

1.  + = **8** pieces of fruit


---

2.  + = **10** pieces of fruit

---

3.  + = **14** pieces of fruit

---

4.  + = **11** pieces of fruit

# Challenge

## More Fruit, Please!

Draw more pieces of fruit to equal each total. Write the partners.

1.  +  = **8** pieces of fruit

**3**

**5**

2.  +  = **10** pieces of fruit



**2**

**8**

3.  +  = **14** pieces of fruit

**4**

**10**

4.  +  = **11** pieces of fruit

**5**

**6**