


Challenge**Match the Clues**

Read each clue. Draw shapes to match each clue. Count the shapes. Write how many.

1. More than 10 \triangle but fewer than 20 \triangle



2. More than 17 \square but fewer than 20 \square



3. 20 \circ

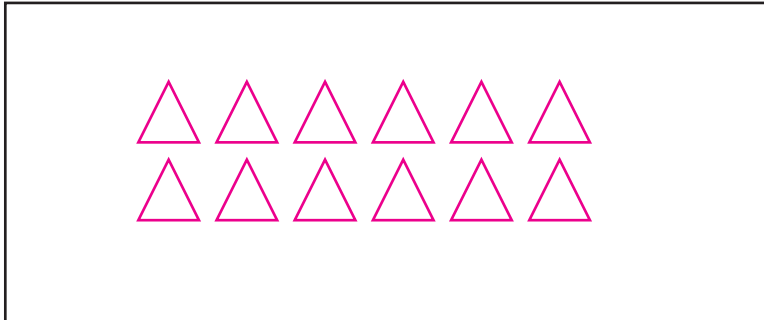


Challenge**Match the Clues**

Read each clue. Draw shapes to match each clue. Count the shapes. Write how many.

1. More than 10 \triangle but fewer than 20 \triangle

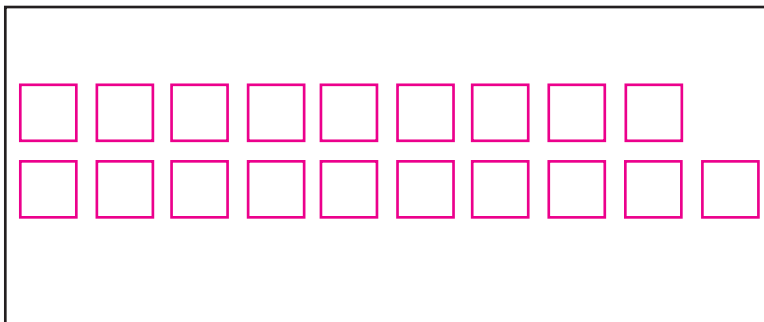
Possible answer shown.



12

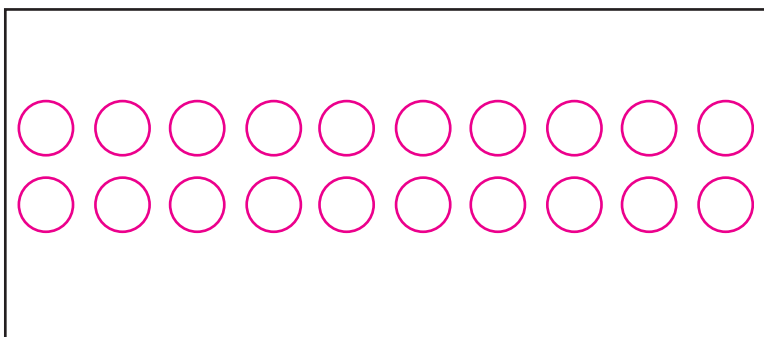
2. More than 17 \square but fewer than 20 \square

Possible answer shown.



19

3. 20 \circ



20