

**Challenge****Finding 5-Groups**

Ring a 5-group in each row. Complete the addition equation for each group.



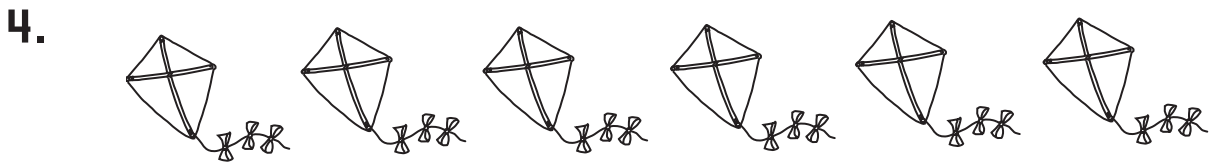
$$9 = 5 + \square$$



$$\square = 5 + \square$$



$$\square = \square + \square$$



$$\square = \square + \square$$



$$\square = \square + \square$$

# Challenge

## Finding 5-Groups

Ring a 5-group in each row. Complete the addition equation for each group.

1.




$$9 = 5 + \boxed{4}$$

2.



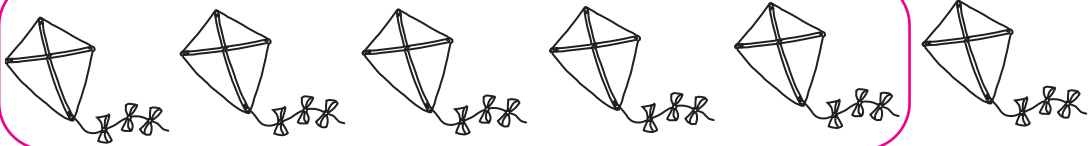
$$\boxed{7} = 5 + \boxed{2}$$

3.



$$\boxed{8} = \boxed{5} + \boxed{3}$$

4.



$$\boxed{6} = \boxed{5} + \boxed{1}$$

5.



$$\boxed{10} = \boxed{5} + \boxed{5}$$