

**Challenge****Draw 5-Groups**

Draw circles to show the total. Remember to use 5-groups.  
Then write the number.

1.  $4 + 4 =$

2.  $6 + 3 =$

3.  $2 + 5 =$


4.  $3 + 3 =$


5.  $6 + 4 =$


6.  $2 + 3 =$


**Challenge****Draw 5-Groups**


Draw circles to show the total. Remember to use 5-groups.  
Then write the number.


1.  $4 + 4 =$    $=$  8

2.  $6 + 3 =$    $=$  9

3.  $2 + 5 =$    $=$  7

4.  $3 + 3 =$    $=$  6

5.  $6 + 4 =$    $=$  10

6.  $2 + 3 =$    $=$  5