


Challenge

In the Park

For each group of pictures, cross out one of the pictures to show -1 .

Write a -1 subtraction equation for each.

1.




2.



3.



4.



5.




Challenge**In the Park**

For each group of pictures, cross out one of the pictures to show $- 1$.


Write a $- 1$ subtraction equation for each.

1.



$$4 - 1 = 3$$

2.




$$5 - 1 = 4$$

3.



$$8 - 1 = 7$$

4.



$$6 - 1 = 5$$

5.



$$8 - 1 = 7$$