

Challenge

At the Lake

Ring how many are added or taken away.


Write the numbers for the partners and how many in all or how many are left.

1.




and are in all.

2.



and are in all.


3.



in all taken away

are left.

4.



in all taken away

are left.

5. Use a Math Drawing On a separate sheet of paper, draw your own picture showing adding or taking away.

Challenge

At the Lake

Ring how many are added or taken away.

Write the numbers for the partners and how many in all or how many are left.

1.




3 and **2** are **5** in all.

2.



5 and **3** are **8** in all.


3.



5 in all **1** taken away

4 are left.

4.



8 in all **2** taken away

6 are left.

5. Use a Math Drawing On a separate sheet of paper, draw your own picture showing adding or taking away.

Answers will vary. Check children's work.