



**Challenge****Domino Match**


Match.




$$2 + 2 = 4$$




$$3 + 2 = 5$$



$$4 + 3 = 7$$



$$4 + 1 = 5$$



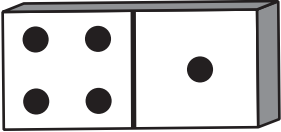
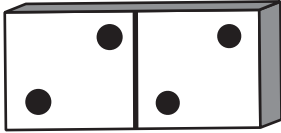
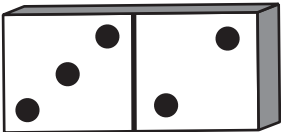


$$5 + 3 = 8$$

6. Use a Math Drawing Draw a domino for  $5 + 1 = 6$ .

# Challenge


## Domino Match

Match.

1.		$2 + 2 = 4$
2.		$3 + 2 = 5$
3.		$4 + 3 = 7$
4.		$4 + 1 = 5$
5.		$5 + 3 = 8$

*Note: Pink lines connect domino 1 to equation 5, domino 2 to equation 4, domino 3 to equation 2, and domino 5 to equation 3.*

6. Use a Math Drawing Draw a domino for  $5 + 1 = 6$ .



or

