


**Challenge****Six, Seven, and Eight**

Count the creatures. Write the number that tells how many.


1.




2.



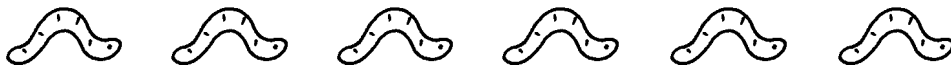
3.



4.



5.



**Challenge****Six, Seven, and Eight**

Count the creatures. Write the number that tells how many.

1.




8

2.




7

3.



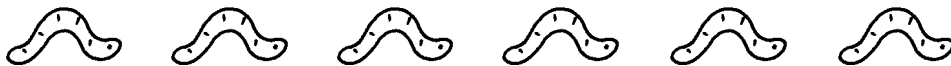
8

4.



6

5.



6