

Challenge

Face It!

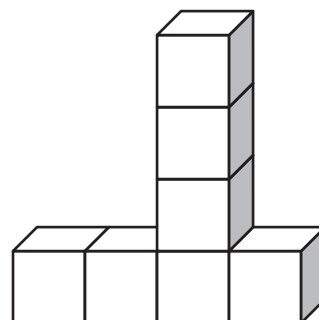
Look at the shapes and answer the questions. *Hint: You are seeing the front and top faces. The shaded faces are the sides.*

1. How many faces do you see from the *front* view?

2. How many faces do you see from the *top* view?

3. What is the volume of the shape?

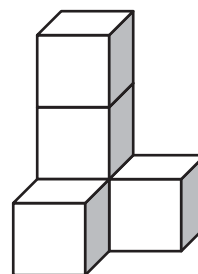
_____ cubic units



4. How many faces do you see from the *top* view?

5. What is the volume of the shape?

_____ cubic units

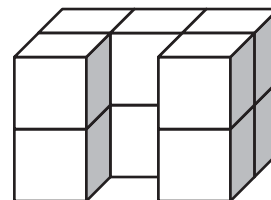


6. How many faces do you see from *side* view?

7. How many faces do you see from the *back* view?

8. What is the volume of the shape?

_____ cubic units



Challenge

Face It!

Look at the shapes and answer the questions. *Hint: You are seeing the front and top faces. The shaded faces are the sides.*

1. How many faces do you see from the *front* view?

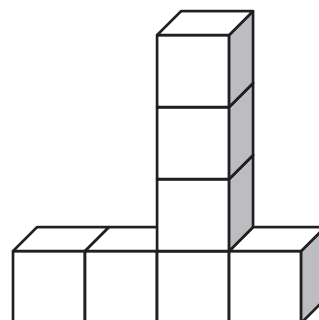
7

2. How many faces do you see from the *top* view?

4

3. What is the volume of the shape?

7 cubic units

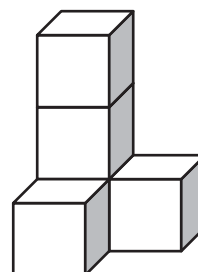


4. How many faces do you see from the *top* view?

3

5. What is the volume of the shape?

5 cubic units



6. How many faces do you see from *side* view?

4

7. How many faces do you see from the *back* view?

6

8. What is the volume of the shape?

10 cubic units

