


Challenge

Creating Shapes

Follow the instructions for each shape. You will either draw diagonals or connect midpoints.

Explain what you did to make the new shapes.

1. Make 2 triangles.




Explain:

2. Make 2 parallelograms.




Explain:

3. Make 4 rectangles.



Explain:

4. Make 4 triangles.



Explain:

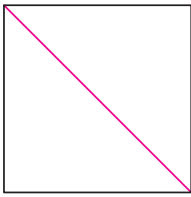
Challenge

Creating Shapes

Follow the instructions for each shape. You will either draw diagonals or connect midpoints.

Explain what you did to make the new shapes.

1. Make 2 triangles.




Explain:

I drew 1 diagonal.

Line drawn is possible answer.

2. Make 2 parallelograms.

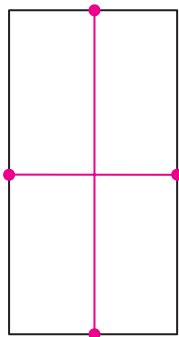


Explain:

I connected 2 midpoints.

Line drawn is possible answer.

3. Make 4 rectangles.



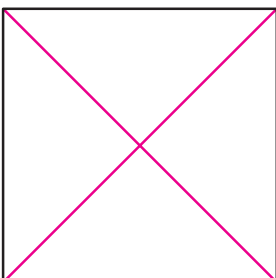
Explain:

I connected 2 midpoints on opposite sides, then connected

the other 2 midpoints on

opposite sides.

4. Make 4 triangles.



Explain:

I drew 2 diagonals.