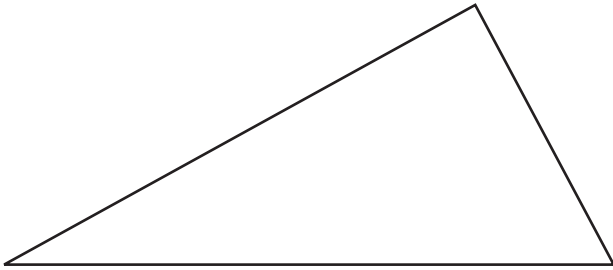


# Challenge

## Measure Up

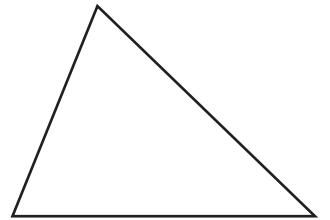
Measure each triangle with a centimeter ruler. Round the measures if you need to. Write the equation you used to find each perimeter.

1.



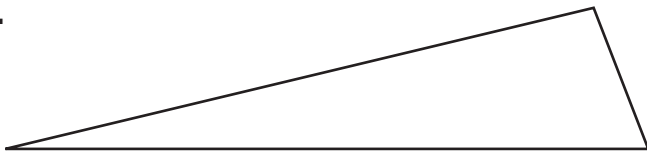
\_\_\_\_\_

2.



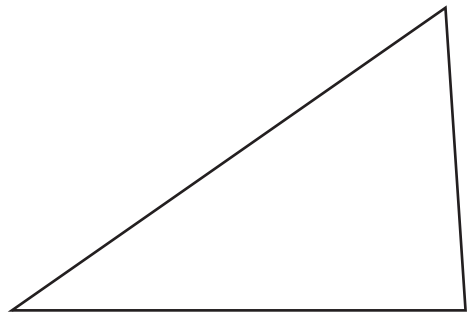
\_\_\_\_\_

3.



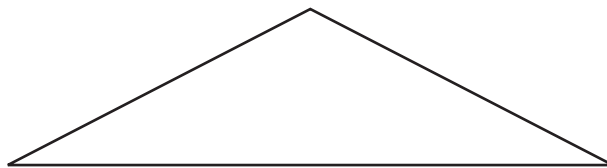
\_\_\_\_\_

4.



\_\_\_\_\_

5.



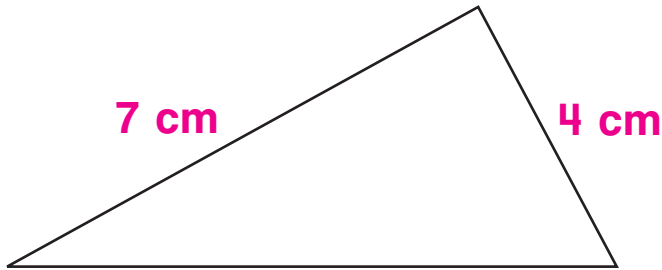
\_\_\_\_\_

# Challenge

## Measure Up

Measure each triangle with a centimeter ruler. Round the measures if you need to. Write the equation you used to find each perimeter.

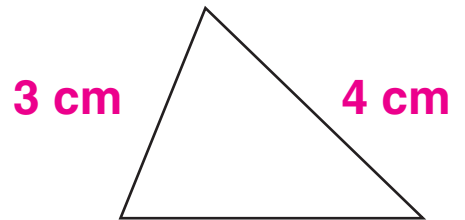
1.



8 cm

$$\underline{4 \text{ cm} + 8 \text{ cm} + 7 \text{ cm} = 19 \text{ cm}}$$

2.



4 cm


$$\underline{4 \text{ cm} + 4 \text{ cm} + 3 \text{ cm} = 11 \text{ cm}}$$

3.

 $8\frac{1}{2}$  cm

$$\underline{8 \text{ cm} + 9 \text{ cm} + 2 \text{ cm} = 19 \text{ cm}}$$

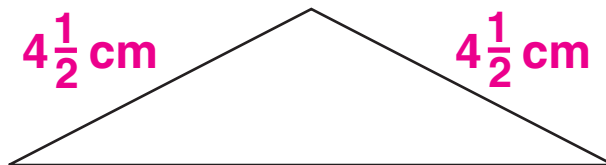
4.



6 cm

$$\underline{7 \text{ cm} + 4 \text{ cm} + 6 \text{ cm} = 17 \text{ cm}}$$

5.



8 cm

$$\underline{5 \text{ cm} + 5 \text{ cm} + 8 \text{ cm} = 18 \text{ cm}}$$