
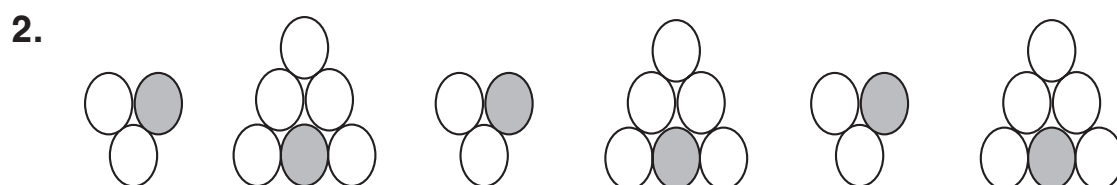



# Challenge

## Shape Up!

Draw the shapes that come next in the pattern. Then write the fraction for the shaded part of each shape.



# Challenge

## Shape Up!

Draw the shapes that come next in the pattern. Then write the fraction for the shaded part of each shape.

1.

$\frac{1}{2}$ 
 $\frac{1}{3}$ 
 $\frac{1}{4}$

2.

$\frac{1}{3}$ 
 $\frac{1}{6}$ 
 $\frac{1}{3}$

3.

$\frac{1}{6}$ 
 $\frac{1}{5}$ 
 $\frac{1}{4}$