

## Challenge

### Fruit Salad for 4

The table below shows the amount of ingredients needed to make a fruit salad for 1 person. You need to make a fruit salad for 4 people. To help you, draw a picture in the ingredients column and then write a multiplication equation.

Ingredients	Amount Needed per Person	Total Amount Needed
bananas	1 per person	_____ _____
strawberries	6 per person	_____ _____
apple slices	5 slices per person	_____ _____
cherries	10 per person	_____ _____





**Extend It** What if you were making fruit salad for 5 people? What would be the new total amounts?

---

## Challenge

### Fruit Salad for 4

The table below shows the amount of ingredients needed to make a fruit salad for 1 person. You need to make a fruit salad for 4 people. To help you, draw a picture in the ingredients column and then write a multiplication equation.

Ingredients	Amount Needed per Person	Total Amount Needed
bananas 	1 per person	$4 \times 1 = 4$ <hr/> <b>4 bananas</b>
strawberries 	6 per person	$4 \times 6 = 24$ <hr/> <b>24 strawberries</b>
apple slices 	5 slices per person	$4 \times 5 = 20$ <hr/> <b>20 apple slices</b>
cherries 	10 per person	$4 \times 10 = 40$ <hr/> <b>40 cherries</b>

**Extend It** What if you were making fruit salad for 5 people? What would be the new total amounts?

**5 bananas; 30 strawberries; 25 apple slices; 50 cherries**