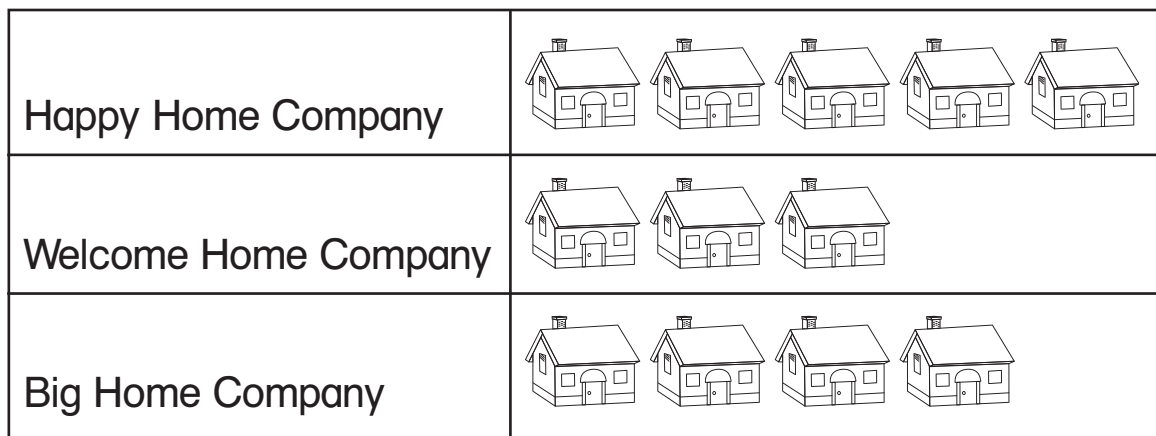


Challenge

Build Skills

The pictograph shows how many houses 3 companies built.



Key: Each  stands for 3 houses.

Write 2 comparison statements about the pictograph.

1. _____

2. _____

3. **Extend It** The zoo has 10 monkeys. It has 6 fewer polar bears than monkeys. How many polar bears are in the zoo? _____

Choose a symbol for the key. Complete the pictograph.




| | |
|-------------|--|
| Monkeys | |
| Polar Bears | |

Key: Each _____ stands for 2 animals.

Challenge

Build Skills

The pictograph shows how many houses 3 companies built.

| | |
|----------------------|------------------------------------------------------------------------------------|
| Happy Home Company |  |
| Welcome Home Company |  |
| Big Home Company |  |

Key: Each  stands for 3 houses.

Write 2 comparison statements about the pictograph.

Statements will vary. Check children's work.

1. Welcome Home Company built six fewer houses than Happy Home Company.

2. Big Home Company built three more houses than Welcome Home Company.

3. **Extend It** The zoo has 10 monkeys. It has 6 fewer polar bears than monkeys. How many polar bears are in the zoo? 4 polar bears

Choose a symbol for the key. Complete the pictograph.

Symbols will vary.

| | |
|-------------|-------|
| Monkeys | ○○○○○ |
| Polar Bears | ○○ |

Key: Each  stands for 2 animals.