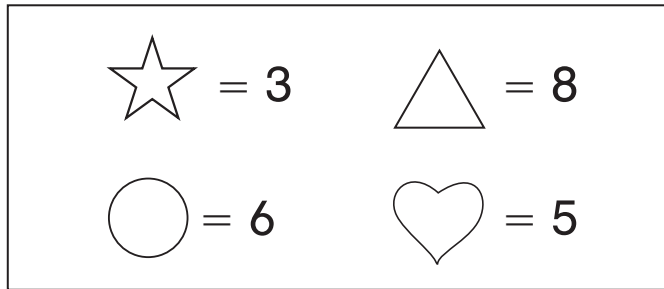


Challenge

Secret Code

Use the key below to solve each addition exercise.







Find each total.

1. 2  +  4 = _____

2. 2  + 4  = _____

Draw the shape in the ones or tens place that makes each equation true.

3. 3 _____ + 1 _____ = 2  +  1

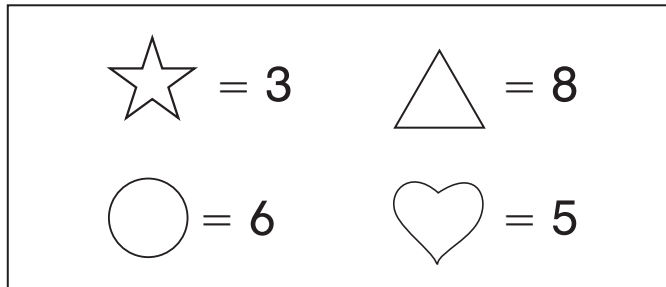
4. 4 _____ + _____ 2 = 7  + 2 

5. **Create Your Own** Use the key to write your own addition equation. Have a classmate solve it.

Challenge

Secret Code

Use the key below to solve each addition exercise.



Find each total.

1. $2 \text{ star} + \text{heart } 4 = \underline{77}$

2. $2 \text{ heart} + 4 \text{ star} = \underline{68}$

Draw the shape in the ones or tens place that makes each equation true. **Possible answers given.**

3. $3 \text{ circle} + 1 \text{ triangle} = 2 \text{ star} + \text{star } 1$

4. $4 \text{ triangle} + \text{heart } 2 = 7 \text{ heart} + 2 \text{ heart}$

5. **Create Your Own** Use the key to write your own addition equation. Have a classmate solve it.

Equations will vary.